

Mathematics Class Nursery

Student’s Name: _____ Roll No: _____

School Name: _____

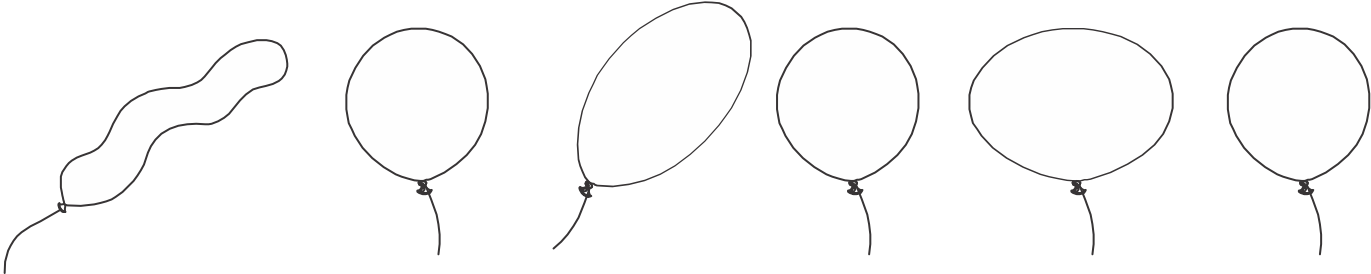
نوٹ: سوالات پرچے میں دی گئی جگہ پر ہی حل کریں۔ اضافی کاپی ہرگز مہیا نہیں کی جائے گی۔ معروضی میں کاٹ کر یا مٹا کر لکھے گئے ہوئے جوابات غلط تصور ہوں گے۔

Total Marks	Obtained Marks	Grade	Remarks	Examiner Sign
100				

Q.1: Oral (20)

Q.2: Write Counting in English from one to five: (10)

Q.3: Tick✓ on same balloons and cross✗ on not same balloons (10)



Q.4: Write “B” for big and “S” for small objects: (10)



Q.5: Write big or small in blanks: (10)



(i) Bus is



(ii) Car is


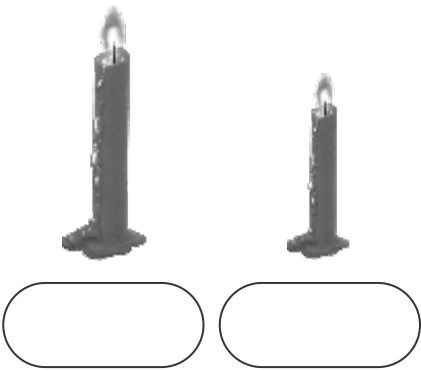


(iii) Elephant is


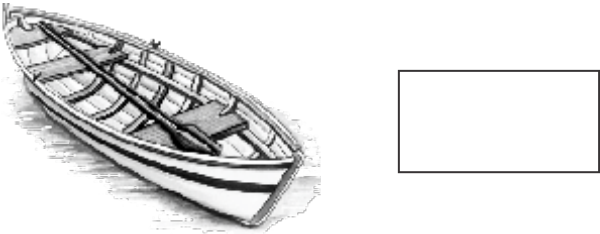



(iv) Fish is

Q.6: Tick ✓ the short: (10)



Q.7: Count the pictures and write the numbers: (10)



Q.8: Draw a line to connect set with number: (10)



- 1
- 3
- 5
- 2
- 4



Q.9: Count and write how many objects are same in each set: (10)

